

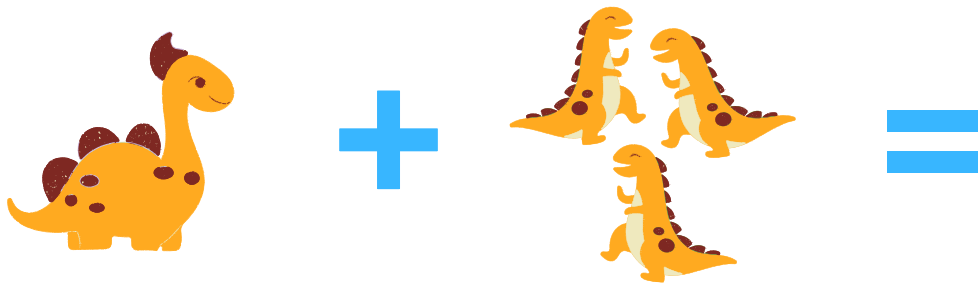
Name:  
Section:

Date:  
Score:

# ADD WITH DINOS!

Let's add and subtract some dinos!


Add or subtract the dinosaurs.  
Write the correct answer on the space provided.




1 Stegosaurus + 3 T-Rexes = 4 dinosaurs



3 T-Rexes + 2 Stegosaurus = 5 dinosaurs



3 T-Rexes - 1 Stegosaurus = 2 dinosaurs



2 Stegosaurus - 1 T-Rex = 1 dinosaur